

STATISTICS VOCABULARY

Name: _____

Complete the sentence with a key Maths word. You have been given the first letter.

Another word for 'how many' is f _____

Statistics can be displayed in c _____ and graphs.

The difference between the smallest and biggest value is the r _____

The m _____ is the middle value.

The a _____ is a value used to summarise data.

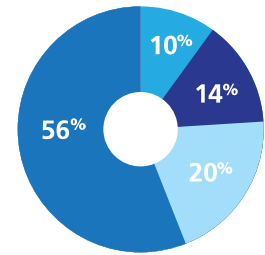
You find the m _____ by dividing the total by the number of values in the set.

Graphs are used to visually r _____ Statistics (*not record*).

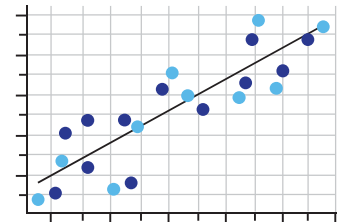
The names of these 3 diagrams are:

Jane	
Chris	
Sam	

P _____



P _____

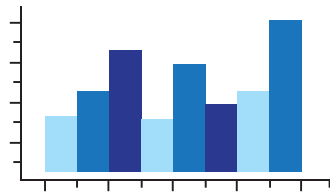


S _____

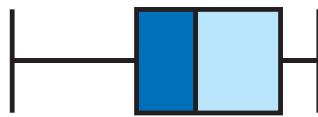
This data is in i _____



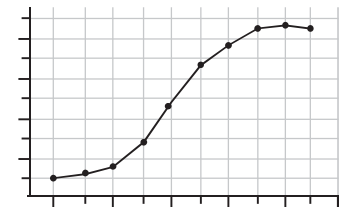
The names of these 3 diagrams are:



H _____



B _____



C _____

The upper q _____ is the top 25% of the population.

